




**ATTIVITÀ 9**

**In quanto tempo l'acqua passa nei diversi terreni?**

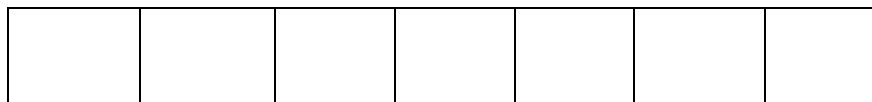


Fai l'esperimento e segna i dati nella tabella, poi completa il grafico.


Tipo di terreno	Tempo
 terriccio	minuti    secondi <div style="border: 1px solid black; width: 60px; height: 20px; display: inline-block;"></div> <div style="border: 1px solid black; width: 60px; height: 20px; display: inline-block;"></div>
 sabbia	minuti    secondi <div style="border: 1px solid black; width: 60px; height: 20px; display: inline-block;"></div> <div style="border: 1px solid black; width: 60px; height: 20px; display: inline-block;"></div>
 argilla	minuti    secondi <div style="border: 1px solid black; width: 60px; height: 20px; display: inline-block;"></div> <div style="border: 1px solid black; width: 60px; height: 20px; display: inline-block;"></div>



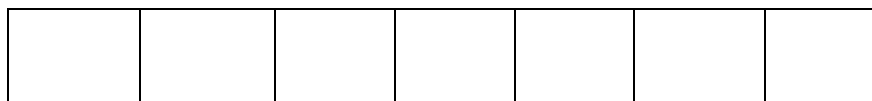
sabbia



ghiaia



argilla



0      20      40      60      80      100      120      140

tempo in secondi